

# Canadian Open Mathematics Challenge 2017

---

## Unofficial Solutions

*Presented by the Canadian Mathematical Society and supported by the Actuarial Profession.*



These solutions are *unofficial*. If you notice an error or a lack of clarity in the solutions, please email us at [comc2017@cms.math.ca](mailto:comc2017@cms.math.ca)

The COMC has 3 sections:

- A. Short answer questions worth 4 marks each. A correct answer receives full marks. Partial marks may be awarded for work shown if a correct answer is not provided.
- B. Short answer questions worth 6 marks each. A correct answer receives full marks. Partial marks may be awarded for work shown if a correct answer is not provided.
- C. Multi-part full solution questions worth 10 marks each. Solutions must be complete and clearly presented to receive full marks.

COMC exams from other years, with or without the solutions included, are free to download online. Please visit <http://comc.math.ca/2017/practice.html>

## Section A – 4 marks each

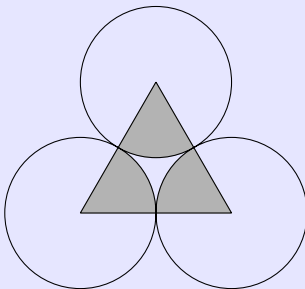
**A1.** The average of the numbers 2, 5,  $x$ , 14, 15 is  $x$ . Determine the value of  $x$ .

**Correct answer:**  $\boxed{9}$ .

**Solution 1:** The average of the numbers is  $\frac{2 + 5 + x + 14 + 15}{5} = \frac{x + 36}{5}$ ; this must be equal  $x$ . Solving  $36 + x = 5x$ , we have  $x = 9$ .

**Solution 2:** Since the  $x$  being there would not affect the average of the other 4 numbers,  
$$x = \frac{2 + 5 + 14 + 15}{4} = \frac{36}{4} = 9.$$

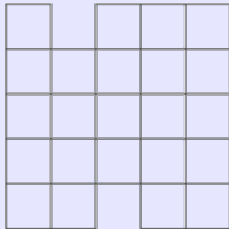
**A2.** An equilateral triangle has sides of length 4cm. At each vertex, a circle with radius 2cm is drawn, as shown in the figure below. The total area of the shaded regions of the three circles is  $a \times \pi \text{ cm}^2$ . Determine  $a$ .



**Correct answer:**  $\boxed{2}$ .

**Solution:** The area of the intersection of each circle and the triangle is  $4\pi/6 \text{ cm}^2$ . The three circles do not overlap, thus the total area is  $2\pi \text{ cm}^2$ .

**A3.** Two  $1 \times 1$  squares are removed from a  $5 \times 5$  grid as shown.



Determine the total number of squares of various sizes on the grid.

**Correct answer:** 39 squares.

**Solution 1:** There are 23  $1 \times 1$  squares, 12  $2 \times 2$  squares, and 4  $3 \times 3$  squares. This gives  $23 + 12 + 4 = 39$  squares.

**Solution 2:** Number of squares without missing parts is  $1^2 + 2^2 + 3^2 + 4^2 + 5^2 = 55$ .

Missing  $1 \times 1$  squares is 2.

Missing  $2 \times 2$  squares is 4.

Missing  $3 \times 3$  squares is 5.

Missing  $4 \times 4$  squares is 4.

Missing  $5 \times 5$  squares is 1.

Total missing squares is  $2 + 4 + 5 + 4 + 1 = 16$ . Thus the number of squares in the diagram is  $55 - 16 = 39$ .

**A4.** Three positive integers  $a, b, c$  satisfy

$$4^a \times 5^b \times 6^c = 8^8 \times 9^9 \times 10^{10}.$$

Determine the sum of  $a + b + c$ .

**Correct answer:** 36.

**Solution:** The prime factorization of the left-hand side is

$$2^{2a} \times 5^b \times 2^c \times 3^c = 2^{2a+c} \times 3^c \times 5^b,$$

and the prime factorization of the right-hand-side is

$$2^{24} \times 3^{18} \times 2^{10} \times 5^{10} = 2^{34} \times 3^{18} \times 5^{10}.$$

Therefore,  $2a + c = 34$ ,  $c = 18$  and  $b = 10$ . We now find  $a$ . Since  $2a + c = 34$  and  $c = 18$ ,  $2a + 18 = 34$ , yielding  $a = 8$ . Therefore,  $a + b + c = 8 + 10 + 18 = 36$ .

## Section B – 6 marks each

**B1.** Andrew and Beatrice practice their free throws in basketball. One day, they attempted a total of 105 free throws between them, with each person taking at least one free throw. If Andrew made exactly  $\frac{1}{3}$  of his free throw attempts and Beatrice made exactly  $\frac{3}{5}$  of her free throw attempts, what is the highest number of successful free throws they could have made between them?

**Correct answer:** 59 free throws.

**Solution 1:** From their success rates we conclude that each of them must have made a multiple of 15 throws. Specifically, from Andrew's success rate, his number of throws must be a multiple of 3. Since the total number of throws (105) is also a multiple of 3, Beatrice's number of throws must be a multiple of 3 too. From Beatrice's success rate, her number of throws must be a multiple of 5, and thus must in fact be a multiple of 15. Similarly, since 105 is a multiple of 5, Andrew's number of throws must be a multiple of 5 and thus a multiple of 15 too.

Since  $\frac{1}{3} < \frac{3}{5}$ , to maximize the result we should assume that Andrew made the least possible number of throws, that is 15. Then Beatrice made 90 throws.

Then the number of successful free throws they could have made between them is

$$15 \times \frac{1}{3} + 90 \times \frac{3}{5} = 5 + 54 = 59.$$

The maximum possible number of successful free throws they could have made between them is 59.

**Solution 2:** Suppose Andrew made  $a$  free throws and Beatrice  $b$  free throws, then  $a + b = 105$ ,  $a > 0$ ,  $b > 0$ . Let  $M$  be the number of successful free throws. We have

$$M = \frac{a}{3} + \frac{3b}{5} = \frac{a}{3} + \frac{3(105 - a)}{5} = \frac{945 - 4a}{15} = 63 - \frac{4a}{15}.$$

$M$  is maximal when  $\frac{4a}{15}$  is minimal. That is,  $a = 15$  and so  $M = 59$ .

The maximum possible number of successful free throws they could have made between them is 59.

**B2.** There are twenty people in a room, with  $a$  men and  $b$  women. Each pair of men shakes hands, and each pair of women shakes hands, but there are no handshakes between a man and a woman. The total number of handshakes is 106. Determine the value of  $a \times b$ .

**Correct answer:** 84.

**Solution 1:** Since there are twenty people in the room,

$$a + b = 20.$$

Now we use the fact that there are no handshakes between a man and a woman. In a group of  $m$  people, there are  $m(m - 1)/2$  pairs of people. Hence, the number of handshakes that took place is

$$\frac{a(a - 1)}{2} + \frac{b(b - 1)}{2} = 106,$$

which simplifies to

$$\frac{a^2 + b^2 - (a + b)}{2} = 106 \Rightarrow a^2 + b^2 = 212 + (a + b) = 232.$$

Substituting  $b = 20 - a$  into this equation yields

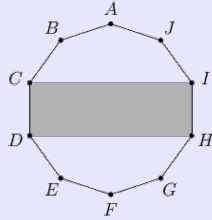
$$\begin{aligned} a^2 + (20 - a)^2 &= 232 \Rightarrow a^2 + (400 - 40a + a^2) = 232 \\ \Rightarrow 2a^2 - 40a + 168 &= 0 \Rightarrow 2(a^2 - 20a + 84) = 0. \end{aligned}$$

This factors as  $2(a - 14)(a - 6) = 0$ . Therefore,  $a = 14$  or  $a = 6$ . Since  $a + b = 20$ ,  $(a, b) = (14, 6)$  or  $(6, 14)$ . Hence,  $a \times b = 84$ .

**Solution 2:** Since there are 20 people in the room, there are  $\frac{20 \times 19}{2} = 190$  pairs of people. Out of them exactly  $a \times b$  pairs do not shake hands.

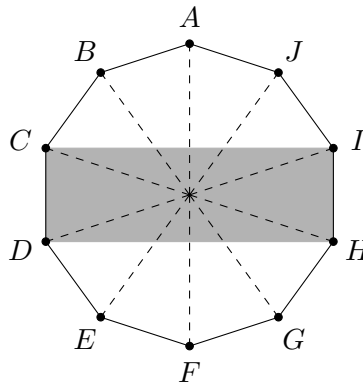
Thus, we have  $190 - a \times b = 106$ , and so  $a \times b = 190 - 106 = 84$ .

**B3.** Regular decagon (10-sided polygon)  $ABCDEFGHIJ$  has area 2017 square units. Determine the area (in square units) of the rectangle  $CDHI$ .



**Correct answer:** 806.8 square units.

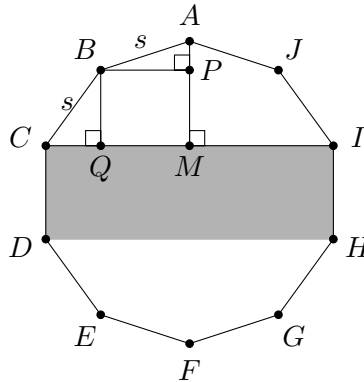
**Solution 1:** If  $O$  is the centre of the decagon and we cut the decagon into equal isosceles triangles, as shown, we can see that the area of the decagon is 10 times the area of one triangle. Since diagonals  $CH$  and  $DI$  are equal in length and bisect each other, quadrilateral  $CDHI$  is a rectangle, with the same base as each of the triangles, but twice the height. Thus the area of  $CDHI$  is 4 times the area of each of the triangles and hence 40% of the area of the decagon or  $0.4 \times 2017 = 806.8$  square units.



The area of the rectangle is 806.8 square units.

*A second solution is provided on the next page.*

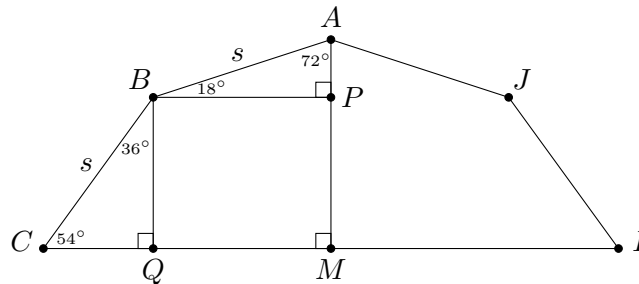
**Solution 2:** Let  $s = |AB|$  be the side length of the regular decagon. Since it is a regular polygon with 10 sides, all its angles are equal, in particular  $\angle ABC = \angle JAB = 180 \times (10 - 2)/10 = 144^\circ$ . Let  $M$  be the midpoint of  $CI$ . Draw  $AM$ , which will be perpendicular to  $CI$ . Place point  $P$  on  $AM$  and point  $Q$  on  $CM$  such that  $BP$  is perpendicular to  $AM$  and  $BQ$  is perpendicular to  $CM$ .



The area of  $ABCM$  could be found as a sum of areas of two right triangles  $BPA$  and  $BQC$  and the rectangle  $BPMQ$ . Note that angle  $BAP$  is  $144/2=72^\circ$  and so angle  $ABP$  is  $90 - 72 = 18^\circ$ . Now, angle  $CBQ$  is  $144 - 18 - 90 = 36^\circ$ , and so angle  $BCQ$  is  $90 - 36 = 54^\circ$ .

The area of the right triangle  $BPA$  is  $\frac{1}{2}s^2 \sin 18^\circ \cos 18^\circ = \frac{1}{4}s^2 \sin 36^\circ$ .

The area of the right triangle  $BQC$  is  $\frac{1}{2}s^2 \sin 54^\circ \cos 54^\circ = \frac{1}{4}s^2 \sin 108^\circ = \frac{1}{4}s^2 \cos 18^\circ$ .



The area of the rectangle  $BPMQ$  is  $s^2 \sin 54^\circ \cos 18^\circ = \frac{1}{2}s^2(\sin 36^\circ + \sin 72^\circ) = \frac{1}{2}s^2(\sin 36^\circ + \cos 18^\circ)$ .

Therefore, the area of  $ABCM$  is  $\frac{3}{4}s^2(\sin 36^\circ + \cos 18^\circ) \equiv \Delta$ .

Next, the area of  $CDHI$  is  $2s^2(\sin 36^\circ + \cos 18^\circ) = \frac{8}{3}\Delta$ .

The total area of the decagon is  $4\Delta + \frac{8}{3}\Delta = \frac{20}{3}\Delta = 2017$ .

Thus, the area of  $CDHI$  is  $\frac{8}{20} \times 2017 = 806.8$ .



**B4.** Numbers  $a, b$  and  $c$  form an arithmetic sequence if  $b - a = c - b$ . Let  $a, b, c$  be positive integers forming an arithmetic sequence with  $a < b < c$ . Let  $f(x) = ax^2 + bx + c$ . Two distinct real numbers  $r$  and  $s$  satisfy  $f(r) = s$  and  $f(s) = r$ . If  $rs = 2017$ , determine the smallest possible value of  $a$ .33

**Correct answer:** 9.

**Solution 1:** Note that

$$ar^2 + br + c = s \quad (1)$$

$$as^2 + bs + c = r \quad (2)$$

Subtracting the second equation from the first yields

$$\begin{aligned} a(r^2 - s^2) + b(r - s) &= -(r - s) \Rightarrow a(r + s)(r - s) + (b + 1)(r - s) = 0 \\ &\Rightarrow (a(r + s) + b + 1)(r - s) = 0. \end{aligned}$$

Since  $r \neq s$ ,  $r + s = -\frac{b+1}{a}$ .

Substituting  $s = -\frac{b+1}{a} - r$  into the first equation yields

$ar^2 + br + c = -\frac{b+1}{a} - r \Rightarrow ar^2 + (b+1)r + c + \frac{b+1}{a} = 0$ . Substituting  $r = -\frac{b+1}{a} - s$  into the second equation yields  $as^2 + bs + c = -\frac{b+1}{a} - s \Rightarrow as^2 + (b+1)s + c + \frac{b+1}{a} = 0$ . Therefore,  $r, s$  are the roots to the equation  $ax^2 + (b+1)x + c + \frac{b+1}{a} = 0$ . The product of the roots of this equation is  $\frac{c}{a} + \frac{b+1}{a^2} = 2017$ .

We also know that the coefficients form an arithmetic sequence, so let  $b = a + k, c = a + 2k$ . Then we have  $\frac{a+2k}{a} + \frac{a+k+1}{a^2} = 2017$  and so

$$k = \frac{2016a^2 - 1 - a}{2a + 1} = 1008a - 504 + \frac{503 - a}{2a + 1} = 1008a - 504 + \frac{1}{2} \left( \frac{1007}{2a + 1} - 1 \right).$$

Thus, in order for  $k$  to be integer,  $2a + 1$  must be a factor of  $1007 = 19 \times 53$ . Thus,  $a = 9, a = 26$  and  $a = 503$ .

The smallest positive integer  $a$  for which  $k$  is an integer is  $a = 9$ .

For completeness, we find  $k = 8594$  and so  $b = 8603$  and  $c = 17197$ .

Then,  $r = -478 + 3\sqrt{25163}$  and  $s = -478 - 3\sqrt{25163}$  satisfy the above relations.

The answer is 9.

*A second solution is provided on the next page.*

**Solution 2:** Note that

$$ar^2 + br + c = s \quad (1)$$

$$as^2 + bs + c = r \quad (2)$$

Subtracting the second equation from the first yields

$$\begin{aligned} a(r^2 - s^2) + b(r - s) &= -(r - s) \Rightarrow a(r + s)(r - s) + (b + 1)(r - s) = 0 \\ &\Rightarrow (a(r + s) + b + 1)(r - s) = 0. \end{aligned}$$

Since  $r \neq s$ ,  $r + s = -\frac{b+1}{a}$ .

Now multiplying (1) by  $r$  and (2) by  $s$ , we obtain

$$ar^3 + br^2 + cr = rs \quad (3)$$

$$as^3 + bs^2 + cs = rs \quad (4)$$

Adding (3) and (4) we get

$$2rs = a((r + s)^3 - 3rs(r + s)) + b((r + s)^2 - 2rs) + c(r + s).$$

Therefore,

$$rs(2 + 3a(r + s) + 2b) = a(r + s)^3 + b(r + s)^2 + c(r + s). \quad (5)$$

Now,

$$2 + 3a(r + s) + 2b = 2 - 3(b + 1) + 2b = -(b + 1) = a(r + s).$$

From (5),  $ars(r + s) = a(r + s)^3 + b(r + s)^2 + c(r + s)$ , and so

$$rs = (r + s)^2 + \frac{b}{a}(r + s) + \frac{c}{a} = \frac{(b + 1)^2}{a^2} - \frac{b(b + 1)}{a^2} + \frac{c}{a} = \frac{b + 1}{a^2} + \frac{c}{a}.$$

Thus,  $2017 = \frac{b+1}{a^2} + \frac{c}{a}$ . That is,  $2017a^2 - ca - (b + 1) = 0$ . Since  $a, b, c$  form an arithmetic sequence,  $2b = a + c$  or  $c = 2b - a$ . From the last equation we obtain  $2017a^2 - (2b - a)a - (b + 1) = 0$ , which implies

$$b = \frac{2018a^2 - 1}{2a + 1} = \frac{(2a + 1)(1009a - 1) - 1007a}{2a + 1} = 1009a - 1 - \frac{1007a}{2a + 1}.$$

Now,  $b$  is integer, so  $\frac{1007a}{2a+1}$  must be integer. Since  $\gcd(a, 2a + 1) = 1$ ,  $2a + 1$  must be a factor of  $1007 = 19 \times 53$ , and so  $a = 9$ ,  $a = 26$  or  $a = 503$ . The smallest value is  $a = 9$ .

## Section C – 10 marks each

*Note: Section C questions require participants to show all their work.*

**C1.** For a positive integer  $n$ , we define function  $P(n)$  to be the sum of the digits of  $n$  **plus** the number of digits of  $n$ . For example,  $P(45) = 4 + 5 + 2 = 11$ . (Note that the first digit of  $n$  reading from left to right, cannot be 0).

(a) Determine  $P(2017)$ .

**Solution:**  $2 + 0 + 1 + 7 + 4 = 14$ .

The answer is  $\boxed{P(2017)=14}$ .

(b) Determine all numbers  $n$  such that  $P(n) = 4$ .

**Solution:** Consider 1-digit numbers, then  $n = 3$ . Among 2-digit numbers we need those with the sum of their digits equal to 2; so we have  $n = 11$  and  $n = 20$ . Among 3-digit numbers we need those with the sum of their digits equal to 1; so we have  $n = 100$ . For numbers with 4 or greater than 4 digits,  $P(n) > 4$ , so we have listed all possible numbers with the required property.

The answer is  $\boxed{3, 11, 20, 100}$ .

(c) Determine with an explanation whether there exists a number  $n$  for which  $P(n) - P(n+1) > 50$ .

**Solution:** If  $n$  and  $n + 1$  differ only in one last digit the equality  $P(n) - P(n + 1) > 50$  is not possible.

Consider the case when  $n$  consists of  $k$  9's. Then  $P(n) = 9k + k = 10k$  and  $P(n + 1) = 1 + (k + 1) = k + 2$ . So we have  $P(n) - P(n + 1) = 9k - 2 > 50$ , so  $k \geq 6$ . For  $k = 6$  we obtain  $n = 999,999$  and  $P(999,999) - P(1,000,000) = 60 - 8 > 50$ .

The answer is  $\boxed{\text{Yes, for example } n = 999,999}$ .

**C2.** A function  $f(x)$  is periodic with period  $T > 0$  if  $f(x+T) = f(x)$  for all  $x$ . The smallest such number  $T$  is called the least period. For example, the functions  $\sin(x)$  and  $\cos(x)$  are periodic with least period  $2\pi$ .

- (a) Let a function  $g(x)$  be periodic with the least period  $T = \pi$ . Determine the least period of  $g(x/3)$ .

**Solution:** A period of  $g\left(\frac{x}{3}\right)$  is  $3\pi$  because  $g\left(\frac{x+3\pi}{3}\right) = g\left(\frac{x}{3} + \pi\right) = g\left(\frac{x}{3}\right)$ . Note that if  $g(x/3)$  had a period smaller than  $3\pi$ , then  $g(x)$  would have a period smaller than  $\pi$ , a contradiction.

The answer is  $\boxed{3\pi}$ .

- (b) Determine the least period of  $H(x) = \sin(8x) + \cos(4x)$ .

**Solution:** The least period of  $\sin(8x)$  is  $\frac{\pi}{4}$  because  $\sin(8(x + \frac{\pi}{4})) = \sin(8x + 2\pi) = \sin(8x)$ . The least period of  $\cos(4x)$  is  $\frac{\pi}{2}$  because  $\cos(4(x + \frac{\pi}{2})) = \cos(4x + 2\pi) = \cos(4x)$ . We pick the larger of the two periods for the sum of the functions. In general, it is the least common multiple of the two periods that must be picked.

Note that if  $H(x)$  had a period smaller than  $\pi/2$ , then  $\cos(4x) = H(x) - \sin(8x)$  would also have a period smaller than  $\pi/2$ , and so  $\cos x$  would have a period smaller than  $2\pi$ . Indeed, if  $\cos(4x) = \cos(4(x+T)) = \cos(4x+4T)$  and  $T < \pi/2$  then  $\cos y = \cos(y+4T)$  and  $4T < 4(\pi/2) = 2\pi$ . This is a contradiction.

The answer is  $\boxed{\pi/2}$ .

- (c) Determine the least periods of each of  $G(x) = \sin(\cos(x))$  and  $F(x) = \cos(\sin(x))$ .

**Solution in two parts:**

1.  $G(x + 2\pi) = \sin(\cos(x + 2\pi)) = \sin(\cos(x)) = G(x)$ .

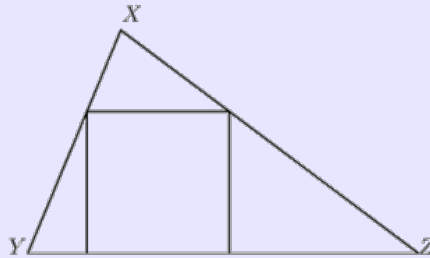
To prove that  $T = 2\pi$  is the smallest positive number consider for example  $x = 0$ . Then  $G(0) = \sin(1)$ . For  $G(T) = \sin(\cos(T)) = \sin(1)$ , we need either  $\cos(T) = 1 + 2\pi k$  or  $\cos(T) = -1 + (2k+1)\pi$ ,  $k \in \mathbf{Z}$ . In the first case we see that the inequality  $-1 \leq 1 + 2\pi k \leq 1$  is true only for  $k = 0$ . This gives  $\cos(T) = 1$ , and so the smallest positive  $T = 2\pi$ . In the second case the inequality  $-1 \leq -1 + (2k+1)\pi \leq 1$  is true for no integer  $k$ . Thus, the only solution is  $T = 2\pi$ .

2.  $F(x + \pi) = \cos(\sin(x + \pi)) = \cos(-\sin(x)) = \cos(\sin(x)) = F(x)$ .

To prove that  $T = \pi$  is the smallest positive number consider for example  $x = 0$ . Then  $F(0) = 1$ . Now, we need  $F(0+T) = \cos(\sin(T)) = 1$ . Thus,  $\sin T = 0$ , and so the smallest positive  $T = \pi$ .

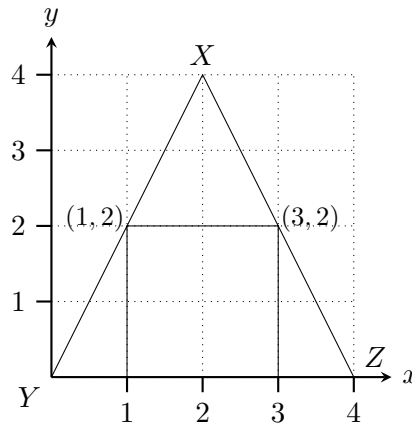
The answers are  $\boxed{2\pi}$  and  $\boxed{\pi}$ .

**C3.** Let  $XYZ$  be an acute-angled triangle. Let  $s$  be the side-length of the square which has two adjacent vertices on side  $YZ$ , one vertex on side  $XY$  and one vertex on side  $XZ$ . Let  $h$  be the distance from  $X$  to the side  $YZ$  and let  $b$  be the distance from  $Y$  to  $Z$ .



(a) If the vertices have coordinates  $X = (2, 4)$ ,  $Y = (0, 0)$  and  $Z = (4, 0)$ , find  $b$ ,  $h$  and  $s$ .

**Solution:** Subtracting coordinates of corresponding points we have  $b = z_1 - y_1 = 4 - 0 = 4$ ,  $h = x_2 - y_2 = x_2 - z_2 = 4 - 0 = 4$ . Note that points  $(1, 2)$  and  $(3, 2)$  lie on sides  $XY$  and  $XZ$  respectively and together with points  $(1, 0)$  and  $(3, 0)$  they define a square that satisfies the conditions of the problem. This square has side  $s = 2$ . (Alternatively, from similar triangles we have  $\frac{s}{b} = \frac{h-s}{h}$  that is  $\frac{s}{4} = \frac{4-s}{4}$ , so  $s = 2$ .)



The answer is  $\boxed{b = 4, \quad h = 4, \quad s = 2}$ .

(b) Given the height  $h = 3$  and  $s = 2$ , find the base  $b$ .

**Solution:** Since  $PQ$  is parallel to  $YZ$ , triangle  $XPQ$  is similar to  $XYZ$ . Because  $h = 3$  and corresponding height of  $XPQ$  is  $3 - 2 = 1$ , we conclude that the base of  $XYZ$  is  $3 \times 2 = 6$ .

The answer is  $\boxed{b = 6}$ .

(c) If the area of the square is 2017, determine the minimum area of triangle  $XYZ$ .

**Solution:** From the similarity of  $XPQ$  and  $XYZ$  we have  $\frac{s}{b} = \frac{h-s}{h}$ . Equivalently,  $s = \frac{bh}{b+h}$ .

Thus,  $s^2 = \frac{(bh)^2}{(b+h)^2} = 2K \frac{bh}{(b+h)^2}$ . Here  $K = \frac{bh}{2}$  is the area of  $XYZ$ .

By AM-GM inequality (arithmetic mean is greater or equal than geometric mean), we have  $\frac{4bh}{(b+h)^2} \leq 1$ , thus  $s^2 \leq \frac{K}{2}$ .

We have  $2017 \leq \frac{K}{2}$ . Thus,  $4034 \leq K$ .

Now, we show that the minimum area is achieved for  $b = h = 2s = 2\sqrt{2017}$ . Indeed, if  $b = h$  then  $s = \frac{bh}{b+h} = \frac{b}{2} = \frac{h}{2}$  and  $K = 2s^2 = 4034$ .

The minimum value for the area of  $XYZ$  is 4034.

The answer is  $\boxed{4034}$ .

**C4.** Let  $n$  be a positive integer and  $S_n = \{1, 2, \dots, 2n - 1, 2n\}$ . A *perfect pairing* of  $S_n$  is defined to be a partitioning of the  $2n$  numbers into  $n$  pairs, such that the sum of the two numbers in each pair is a perfect square. For example, if  $n = 4$ , then a perfect pairing of  $S_4$  is  $(1, 8), (2, 7), (3, 6), (4, 5)$ . It is not necessary for each pair to sum to the same perfect square.

(a) Show that  $S_8$  has at least one perfect pairing.

**Solution:** For  $n = 8$  we have pairs  $(1, 8), (2, 7), (3, 6), (4, 5)$  each of which sums to 9 and  $(9, 16), (10, 15), (11, 14), (12, 13)$  each of which sums to 25.

The answer is  $\boxed{(1, 8), (2, 7), (3, 6), (4, 5), (9, 16), (10, 15), (11, 14), (12, 13)}$ .

(b) Show that  $S_5$  does not have any perfect pairings.

**Solution 1:** Each pair must have a sum 16, 9, 4. There are 5 pairs that must sum to 55. There must be at least two pairs that sum to 16. If there are two such pairs, then the other three pairs must sum to  $55 - 32 = 23$ , which cannot be done with the numbers 9, 4. There cannot be more than two pairs that sum to 16, since there are only two such pairs, namely  $(6, 10), (7, 9)$ .

P.S. It is also possible to construct an argument by considering all sums modulo 8:

$$55 \equiv 7 \pmod{8}, \quad 16 \equiv 0 \pmod{8}, \quad 9 \equiv 1 \pmod{8}, \quad 4 \equiv 4 \pmod{8}.$$

Thus, for five pairs we must have  $7 = 4 + 1 + 1 + 1 + 0$ . But this does not give the correct sum:  $4 + 9 + 9 + 9 + 16 = 47 \neq 55$ , so perfect pairing is not possible.

**Solution 2:** Consider  $S_5 = \{1, 2, 3, 4, 5, 6, 7, 8, 9, 10\}$ . Note that 10 needs 6 to make a perfect pair, which means that 3 can only pair perfectly with 1. This leaves 8 with no partner with which to make a perfect pair.

- (c) Prove or disprove: there exists a positive integer  $n$  for which  $S_n$  has at least 2017 different perfect pairings. (Two pairings that are comprised of the same pairs written in a different order are considered the same pairing.)

**Solution 1:** The easiest way to get a perfect pairing from  $\{a, a + 1, \dots, 2m\}$  is for all pairs to have the same sum, i.e.  $a + 2m$  to be a square. The next easiest way is if there are two possible sums, which happens when the sets  $\{a, \dots, 2n\}$  and  $\{2n + 1, \dots, 2m\}$  have both  $a + 2n$  and  $2n + 1 + 2m$  being squares.

We will first prove the following lemma:

**Lemma:** Let  $a \equiv 1 \pmod{4}$  be a positive integer. Then there exists an even positive integer  $m$  such that  $2m > a$  and  $\{a, a + 1, \dots, 2m\}$  has at least two perfect pairings into  $(2m - a + 1)/2$  pairs.

**Proof of lemma:** Let  $x, y$  be odd positive integers satisfying

$$x^2 > 2a, \quad y^2 > 2(x^2 - a + 1).$$

Then taking  $m = \frac{y^2 - x^2 + a - 1}{2}$ , we have

$$\{a, \dots, 2m\} = \{a, a + 1, \dots, x^2 - a\} \dot{\cup} \{x^2 - a + 1, x^2 - a + 2, \dots, y^2 - x^2 + a - 1\},$$

where we pair up elements in the first set to all have sum  $x^2$ , and in the second set to have sum  $y^2$ . We would also like to pair up elements so every pair has the same sum, i.e. we would like  $2m + a$  to be a square. This translates to solving

$$y^2 - x^2 + 2a - 1 = z^2,$$

subject to  $x, y$  odd positive integers,  $z$  a positive integer,  $x^2 > 2a$ , and  $y^2 > 2(x^2 - a + 1)$ . The condition of  $m$  being even will be automatically satisfied since  $y^2 - x^2 + a - 1 \equiv 0 \pmod{4}$  using  $x, y$  odd (and so  $y^2 - x^2 = (y - x)(y + x) \equiv 0 \pmod{4}$ ) and  $a \equiv 1 \pmod{4}$ . We rearrange our equation into

$$(y - z)(y + z) = y^2 - z^2 = x^2 - 2a + 1.$$

Picking  $x = 2r + 1$  to be any odd positive integer bigger than  $\sqrt{2a}$ , and noting that  $x^2 = 4r(r + 1) + 1 \equiv 1 \pmod{8}$  and  $2a \equiv 2 \pmod{8}$ , we see that  $x^2 - 2a + 1 \equiv 0 \pmod{8}$ . Thus we set  $y - z = 2$ ,  $y + z = \frac{x^2 - 2a + 1}{2}$ , and we get

$$y = \frac{x^2 - 2a + 5}{4}, \quad z = \frac{x^2 - 2a - 3}{4}.$$

Hence  $y, z$  are positive integers,  $y$  is odd, and  $y, z$  satisfy  $y^2 - x^2 + 2a - 1 = z^2$ . We assumed that  $x^2 > 2a$ , so we will be done as long as  $y^2 > 2(x^2 - a + 1)$ . But  $y^2$  is a quartic in  $x$ , so this inequality is satisfied for all  $x$  sufficiently large, and thus we can pick  $x$  to be sufficiently large for this to hold. This completes the proof of the lemma.



We now show that for any  $N \geq 2$  there exists a positive integer  $n$  for which  $S_n$  has at least  $N$  different perfect pairings. We do it by induction on  $N$ , where we also impose that  $n$  must be even. The case  $N = 2$  is given by the above lemma with  $a = 1$ . Assume we have it up to  $N - 1 \geq 2$ , and  $m$  is an even number such that  $\{1, \dots, 2m\}$  has at least  $N - 1$  perfect pairings. Then take  $a = 2m + 1 \equiv 1 \pmod{4}$  in the above lemma, to get an  $n > m$  even with  $\{2m + 1, \dots, 2n\}$  having at least two perfect pairings. Combining these with partitions of  $\{1, \dots, 2m\}$ , we see that  $\{1, \dots, 2n\}$  has at least  $2(N - 1) \geq N$  perfect pairings. Therefore the result is true for  $N = 2017$ .

**Solution 2:** Let us first prove the following statement.

**Lemma:** There exist arbitrarily large  $n \equiv 0 \pmod{4}$  for which the set  $S_n$  has a perfect pairing.

**Proof of lemma:** This proof is by induction. We know that perfect pairing exists for  $S_4$ . Suppose we have a perfect pairing of the set  $S_n$  for some  $n$  divisible by 4. We will construct a perfect pairing of the set  $S_m$  with some  $m > n$  also divisible by 4.

The construction is a straightforward generalization of the method used in the numerical example of part (a). We will find  $m = n + r$  with  $r > 0$  divisible by 4 such that  $2n + 2m + 1 = k^2$  for some integer  $k$ . This yields a perfect pairing for  $S_m$  consisting of all pairs in a perfect pairing for  $S_n$  and new pairs

$$(2n + 1, 2m), (2n + 2, 2m - 1), \dots, (2n + r, 2n + r + 1).$$

So we have the equation  $2(n + m) + 1 = 4n + 2r + 1 = k^2$ , i.e.

$$r = \frac{k^2 - 4n - 1}{2}.$$

Put  $k = 2q + 1$ , where  $q^2 \geq n$ . Then

$$r = (4q^2 + 4q + 1 - 4n - 1)/2 = 2(q(q + 1) - n). \quad (*)$$

Since both  $q(q + 1)$  and  $n$  are even,  $r$  is divisible by 4 and the construction is complete. This completes the proof of the lemma.

Note that in this construction each perfect pairing for  $S_n$  gives rise to a perfect pairing for  $S_m$  and they all are different.

Suppose now, by way of contradiction, that there is some number  $H$  (for the purpose of the problem,  $H < 2017$ ) such that for any  $i \geq 16$  divisible by 4 the set  $S_i$  has at most  $H$  perfect pairings. Let  $n \geq 16$  be divisible by 4 and such that  $S_n$  has exactly  $H$  perfect pairing. Carrying out the above construction, we will find  $H$  perfect pairings for  $S_m$ . We demonstrate below how to obtain  $S_m$  that has a perfect pairing different from those provided by our construction. Such an  $S_m$  will have at least  $H + 1$  perfect pairings, a contradiction.

Since  $n$  is divisible by 4, Put  $q = n/4$  in (\*), which yields  $r = n^2/8 + n/2 - 2n = n(n - 12)/8$ . Here the role of the condition  $n \geq 16$  becomes clear: it ensures that  $r > 0$ . The following simple calculation shows

that  $2m + 1$  is an integer square:

$$2m + 1 = 2(n + r) + 1 = 2n + \frac{n(n - 12)}{4} + 1 = \frac{n^2 - 4n + 4}{4} = \left(\frac{n - 2}{2}\right)^2.$$

Hence, in addition to the perfect pairings for  $S_m$  that correspond to those for  $S_n$ , we have the perfect pairing

$$\{(1, 2m), (2, 2m - 1), \dots, (m, m + 1)\}.$$

---

## Premier Sponsors




**Expertise. Insight.  
Solutions.**



**SOCIETY OF  
ACTUARIES**

---

in association with  crowdmark

---

### Sponsors:

Aqueduct  
Banff International  
Research Station  
Canadian Aviation  
Electronics  
Centre de recherche  
mathématiques  
The Fields Institute  
Maplesoft  
The McLean Foundation  
Nelson  
The Pacific Institute for  
Mathematical Sciences  
Popular Book Company  
RBC Foundation  
S.M. Blair Foundation  
The Samuel Beatty Fund

### University Partners:

University of British Columbia  
University of Calgary  
Dalhousie University  
University of Manitoba  
Memorial University  
University of New Brunswick  
University of Prince Edward Island  
Dept. of Mathematics & Statistics,  
(University of Saskatchewan)  
University of Toronto  
York University

### Government Partners:

Alberta Education  
Manitoba  
New Brunswick  
Northwest Territories  
Nova Scotia  
Nunavut  
Ontario  
Prince Edward Island  
Quebec